



#3 Aufgabe




A 5x5 grid of white circles on a light green background. A gear with the number 16 is placed in the top-left cell. A gear with the number 20 is placed in the middle-right cell.

1 x 1 x




Two gear icons: one with the number 16 and one with the number 20.

#4 Aufgabe



A 5x5 grid of white circles on a light green background. A gear with the number 20 is placed in the top-right cell. A gear with the number 16 is placed in the middle-left cell.

2 x 1 x



Two gear icons: one with the number 16 and one with the number 20.